

Identify the center and radius of each circle.

1) $(x-2)^2 + (y-4)^2 = 36$

Center: (2, 4) Radius: 6

2) $(x-5)^2 + y^2 = 25$

Center: (5, 0) Radius: 5

3) $x^2 + y^2 = 49$

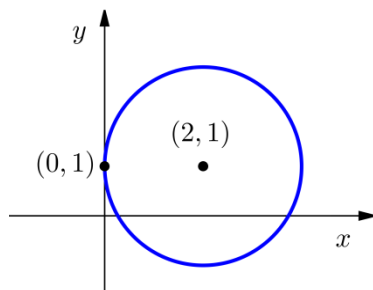
Center: (0, 0) Radius: 7

4) $x^2 + (y+5)^2 = \frac{1}{9}$

Center: (0, -5) Radius: $\frac{1}{3}$

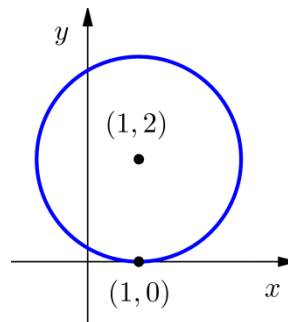
Write the standard form of the equation of each circle shown.

5)



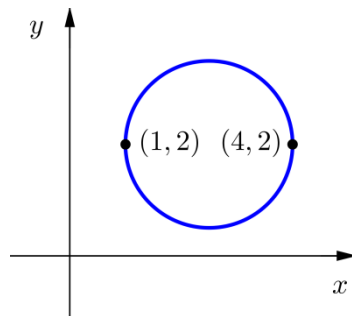
$(x-2)^2 + (y-1)^2 = 4$

6)



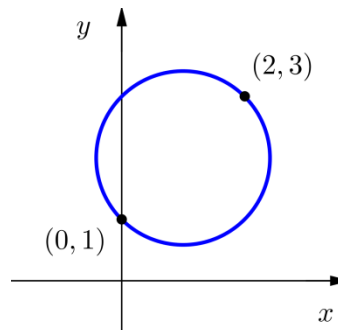
$(x-1)^2 + (y-2)^2 = 4$

7)



$\left(x - \frac{5}{2}\right)^2 + (y-2)^2 = \frac{9}{4}$

8)



$(x-1)^2 + (y-2)^2 = 2$

Write the standard form of the equation of each circle described.

9) Center: $(0, 0)$ Radius: 5

$$x^2 + y^2 = 25$$

10) Center: $(-4, 7)$ Radius: $\sqrt{3}$

$$(x+4)^2 + (y-7)^2 = 3$$

11) Center: $(6, 1)$, tangent to the y -axis.

$$(x-6)^2 + (y-1)^2 = 36$$

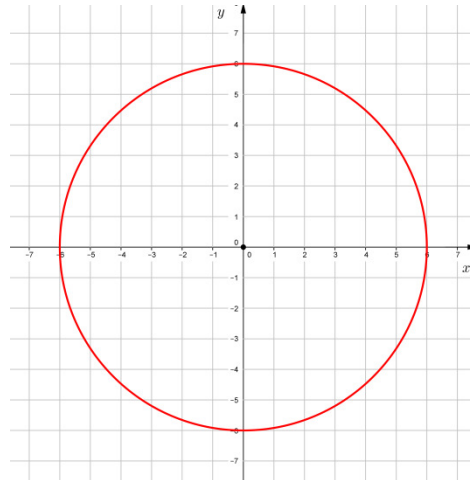
12) Center: $(3, -2)$, tangent to $y = 2$

$$(x-3)^2 + (y+2)^2 = 16$$

Write the standard form of each equation. Then graph the equation.

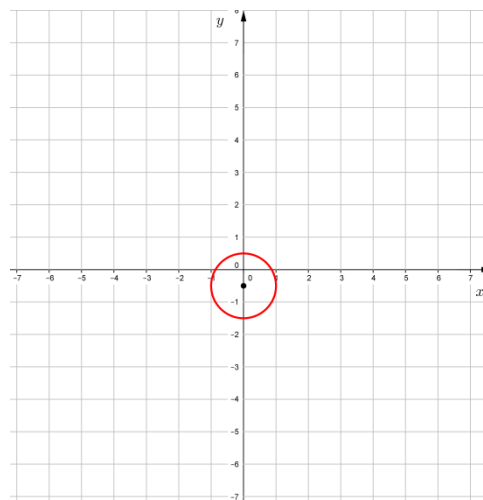
13) $36 - x^2 = y^2$

$$x^2 + y^2 = 36$$



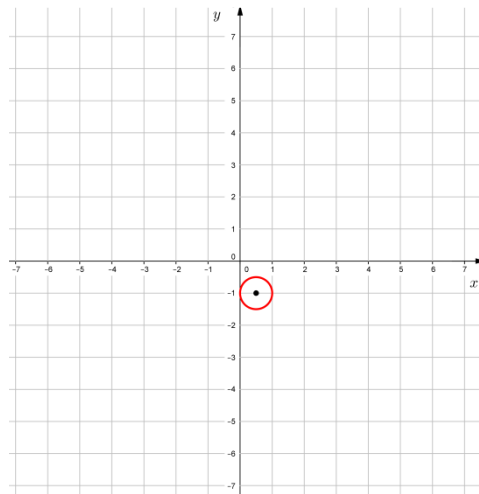
14) $x^2 + y^2 + y = \frac{3}{4}$

$$x^2 + \left(y + \frac{1}{2}\right)^2 = 1$$



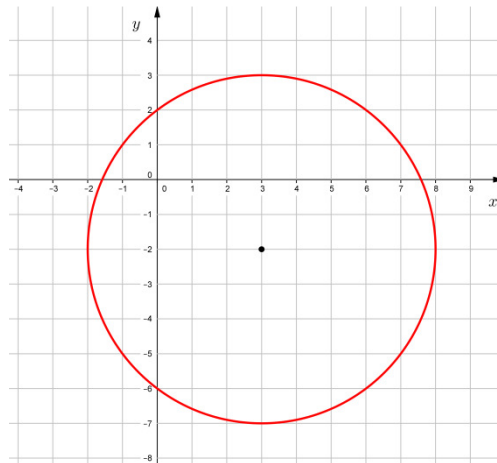
15) $x^2 + y^2 - x + 2y + 1 = 0$

$$\left(x - \frac{1}{2}\right)^2 + (y + 1)^2 = \frac{1}{4}$$



16) $2x^2 + 2y^2 - 12x + 8y - 24 = 0$

$$(x - 3)^2 + (y + 2)^2 = 25$$



Write the standard form of the equation of the circle that passes through the points with the given coordinates.

17) $(7, -1), (11, -5), (3, -5)$

$$(x - 7)^2 + (y + 5)^2 = 16$$

18) $(-2, 3), (6, -5), (0, 7)$

$$(x - 5)^2 + (y - 2)^2 = 50$$

Find an equation of the circle described. (A Sketch may be helpful.)

19) Center in quadrant II, radius 3 and tangent to the y -axis at $(0, 4)$.

$$(x+3)^2 + (y-4)^2 = 9$$

20) Center on the line $y-4=0$ and tangent to the x -axis at $(-2, 0)$.

$$(x+2)^2 + (y-4)^2 = 16$$

21) Center in quadrant four, tangent to the lines $x=1$, $x=9$, and $y=0$.

$$(x-5)^2 + (y+4)^2 = 16$$

22) Tangent to both coordinate axes and the line $x=-8$. (Two answers)

$$(x+4)^2 + (y-4)^2 = 16$$

$$(x+4)^2 + (y+4)^2 = 16$$