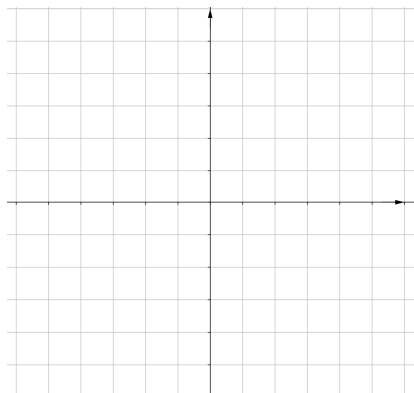


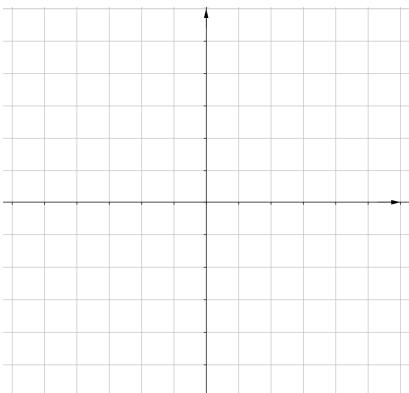
GRAPHING SYSTEM OF LINEAR INEQUALITIES

➤ Graph the systems of linear inequalities.

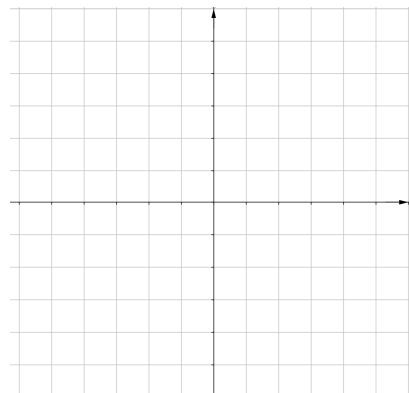
1) $x - y \geq 3$
 $x + y \leq 5$



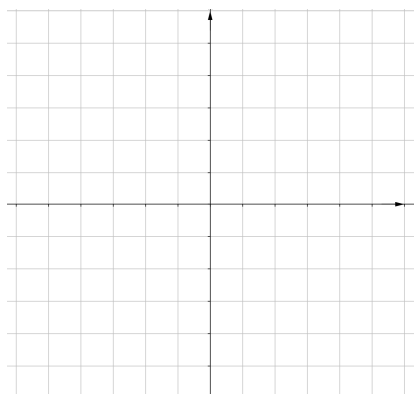
2) $3x - y < 3$
 $2x + y \geq 2$



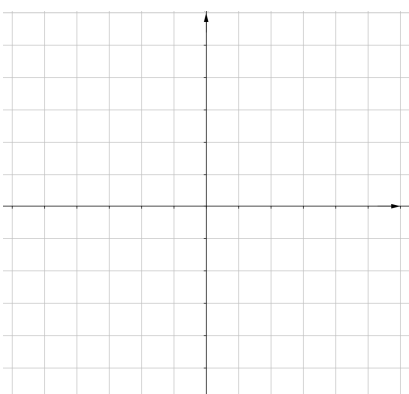
3) $x \leq 2$
 $3x + 2y > 4$



4) $y > 2x - 6$
 $x + y < 0$



5) $x < 3$
 $y < -2$



6) $3x - 2y < 0$
 $5x + 3y > 9$
 $y < 4$

